

Name: _____

Date: _____

Memorial Day Math

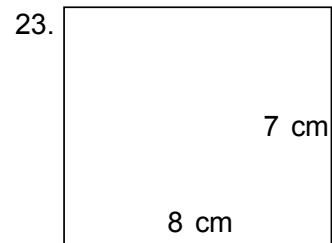
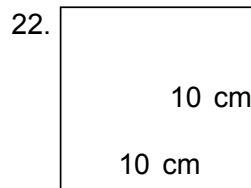
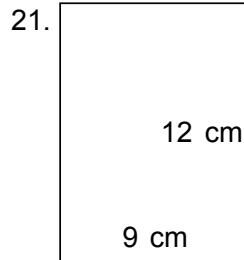
List the factors for each number.

1. 20 = _____
2. 13 = _____
3. 52 = _____
4. 28 = _____
5. 6 = _____
6. 15 = _____
7. 91 = _____
8. 51 = _____
9. 7 = _____
10. 78 = _____

Compare the numbers. Add: > or < or =

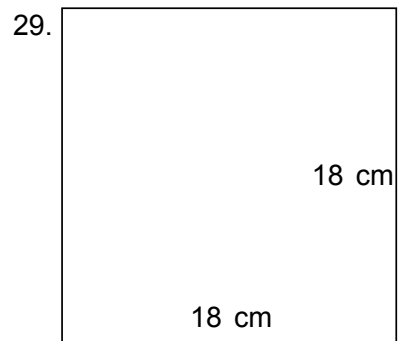
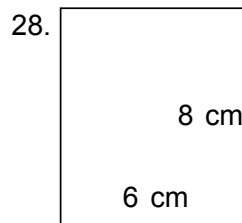
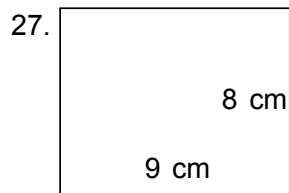
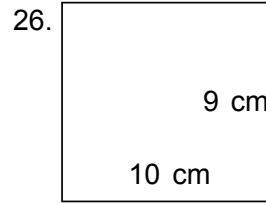
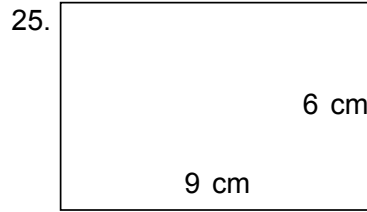
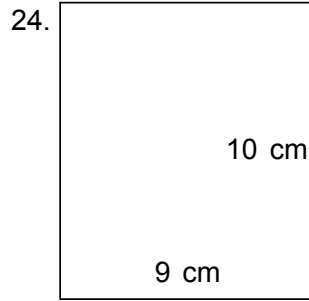
11. 730 1
12. 1 73
13. 6,894 7
14. 6 162
15. 612 182
16. 9,508 473
17. 987 89
18. 1,654 5,496
19. 77 2,570
20. 8,078 5,908

Find the perimeter and area.



Name: _____

Date: _____



Find the difference.

30.
$$\begin{array}{r} \\ - 210 \\ \hline 170 \end{array}$$

31.
$$\begin{array}{r} 640 \\ - 130 \\ \hline \end{array}$$

32.
$$\begin{array}{r} \\ - 410 \\ \hline 300 \end{array}$$

33.
$$\begin{array}{r} 880 \\ - \\ \hline 130 \end{array}$$

34.
$$\begin{array}{r} 540 \\ - 120 \\ \hline \end{array}$$

35.
$$\begin{array}{r} \\ - 130 \\ \hline 100 \end{array}$$

36.
$$\begin{array}{r} \\ - 160 \\ \hline 120 \end{array}$$

37.
$$\begin{array}{r} 430 \\ - \\ \hline 100 \end{array}$$

38.
$$\begin{array}{r} 950 \\ - 330 \\ \hline \end{array}$$

39.
$$\begin{array}{r} 790 \\ - \\ \hline 460 \end{array}$$

40.
$$\begin{array}{r} 340 \\ - \\ \hline 220 \end{array}$$

41.
$$\begin{array}{r} 780 \\ - 420 \\ \hline \end{array}$$

42.
$$\begin{array}{r} \\ - 130 \\ \hline 120 \end{array}$$

43.
$$\begin{array}{r} 560 \\ - 250 \\ \hline \end{array}$$

44.
$$\begin{array}{r} 640 \\ - \\ \hline 210 \end{array}$$

